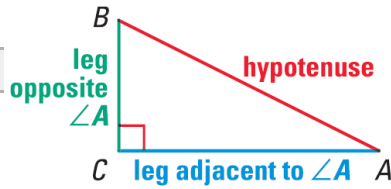


Geometry

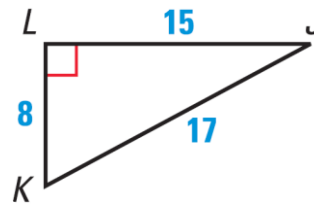
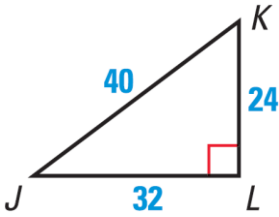
9.4 The Tangent Ratio

Tangent ratio

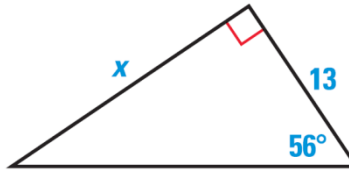
$$\tan A = \frac{\text{leg opposite } \angle A}{\text{leg adjacent to } \angle A}$$



Find $\tan J$ and $\tan K$.



Find the value of x . Round to the nearest tenth.



Assignment: 473 #2, 4, 5, 6, 7, 8, 9, 10, 12, 13, 14, 15, 16, 18, 20, 24, 25, 29, 30, 32 = 20 total